



INDIAN SCHOOL AL WADI AL KABIR

DEPARTMENT OF MATHEMATICS (2023-2024)

TOPIC: MULTIPLICATION

CLASS TEST

RESOURCE PERSON: Ms. Rashmi Kaslikar

NAME: _____ CLASS: III SEC: _____ DATE: _____

PARENT'S SIGN _____ TEACHER'S SIGN _____ MARKS: ____/10

I. Choose the correct answer and fill in the blanks.

(4)

1) If one flower has five petals, how many petals do 7 flowers have?

- a) 57 b) 42 c) 35 d) 40

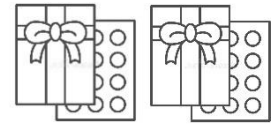


2) $827 \times 0 =$ _____

- a) 827 b) 0 c) 8270 d) None of these

3) I bought 25 boxes of sweets. If each box has 9 sweets, how many sweets did I buy in all?

- a) 230 b) 259 c) 225 d) 952



4) $300 \times 7 =$ _____

- a) 2100 b) 307 c) 730 d) 370

II. Arrange and multiply

(3)

a. 121×4

	Th	H	T	O
\times				
<hr/>				


b. 305×9

	Th	H	T	O
\times				
<hr/>				

III. Solve the word problems given below.


(3)

- a) The clown had 7 bags of balloons. There were 45 balloons in each bag.
How many balloons did the clown have in all?



No. balloons in each bag =	
No. of bags =	
Total no. of balloons =	
Ans:	

- b) Benny brought 4 boxes of little candy bars to school. There were 24 candy bars in each box. Find out the total number of little candy bars.



No. of candies in each bag =	
No. boxes =	
Total No. of candies =	
Ans:	

Best of luck!